

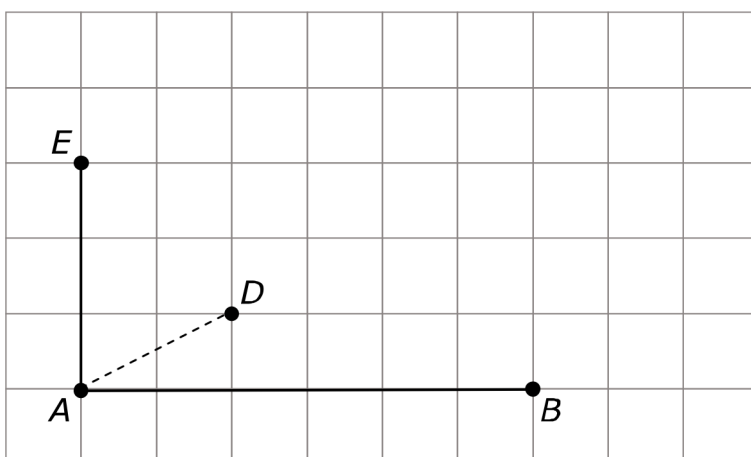
6

| voorwerp: | wiskundige naam | aantal platte grensvlakken | aantal gebogen grensvlakken |
|---------------------|-----------------|----------------------------|-----------------------------|
| pingpongbal | | | |
| potloodpunt | | | |
| dobbelsteen | | | |
| schoenendoos | | | |
| rol pringles | | | |
| ijshoortje | | | |
| doosje celebrations | | | |

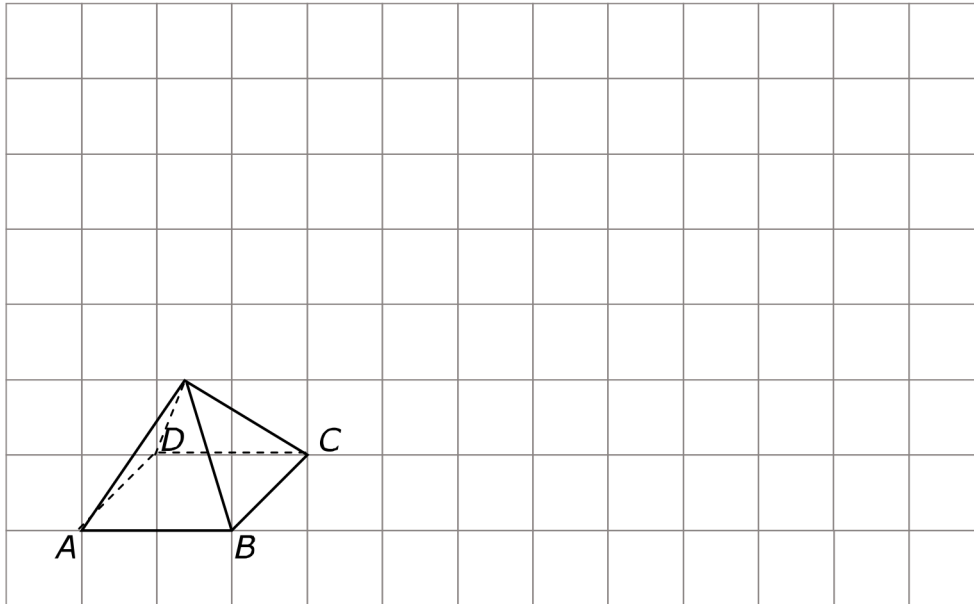
9

| | aantal vlakke grensvlakken | aantal gebogen grensvlakken | aantal hoekpunten | aantal ribben |
|----------------------|----------------------------|-----------------------------|-------------------|---------------|
| kubus | | | | |
| balk | | | | |
| vierzijdige piramide | 5 | | | |
| cilinder | | | | |
| kegel | | | | |
| bol | | | | |
| driehoekig prisma | | | | |

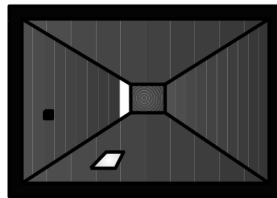
14



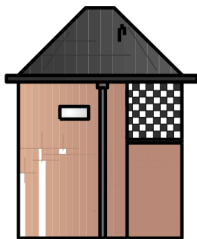
15



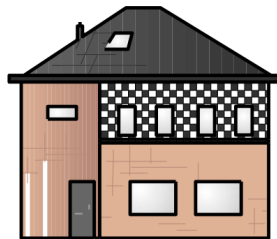
26



.....

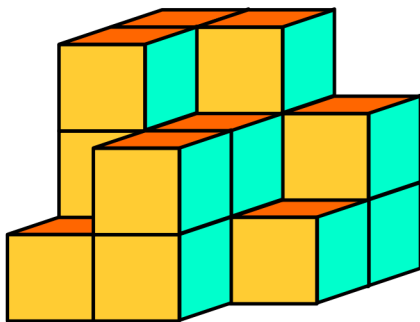


.....



.....

26



bovenaanzicht

| | | |
|---|--|--|
| 3 | | |
| | | |
| | | |

Knip je plaatjes uit en plak ze bij de juiste opgave in je schrift.

1**5**