

Name : _____

Score : _____

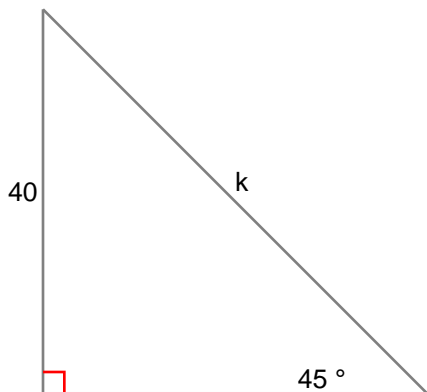
Teacher : _____

Date : _____

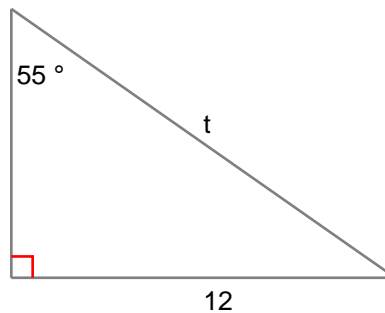
Solving Right Triangles

Find the side indicated by the variable. Round to the nearest tenth.

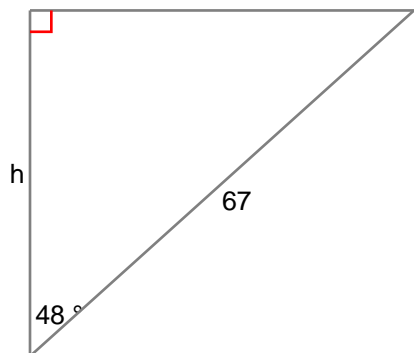
1) $k =$ _____



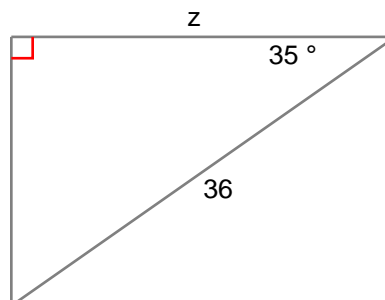
2) $t =$ _____



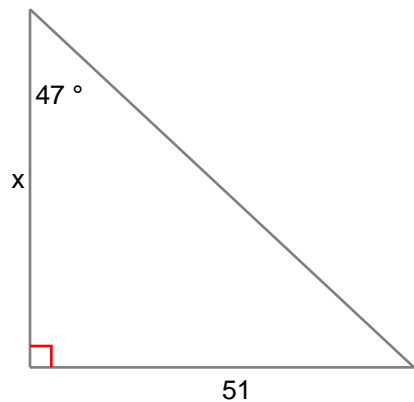
3) $h =$ _____



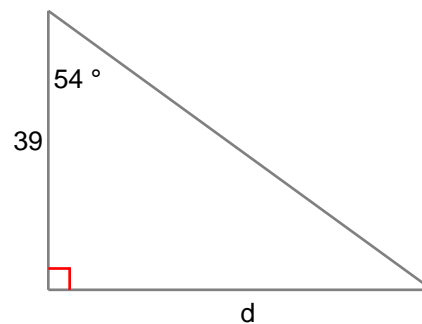
4) $z =$ _____



5) $x =$ _____



6) $d =$ _____



Name : _____

Score : _____

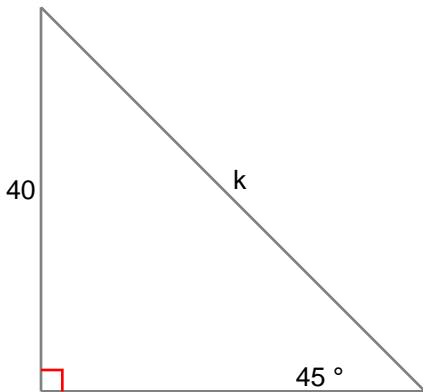
Teacher : _____

Date : _____

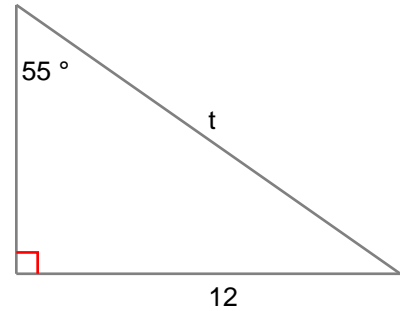
Solving Right Triangles

Find the side indicated by the variable. Round to the nearest tenth.

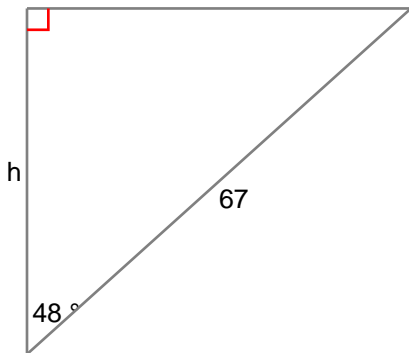
1) $k = \underline{56.6}$



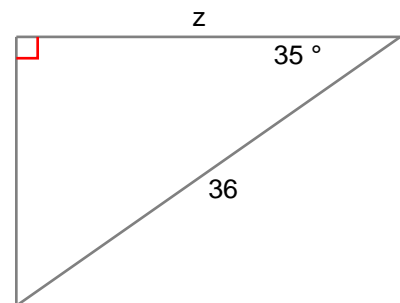
2) $t = \underline{14.6}$



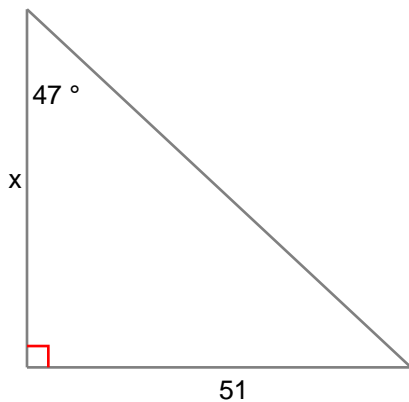
3) $h = \underline{44.8}$



4) $z = \underline{29.5}$



5) $x = \underline{47.6}$



6) $d = \underline{53.7}$

