

Name : _____

Score : _____

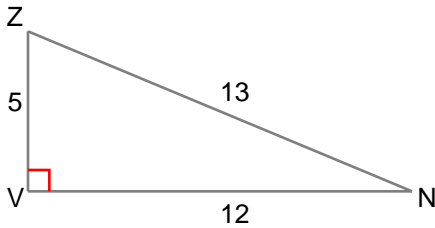
Teacher : _____

Date : _____

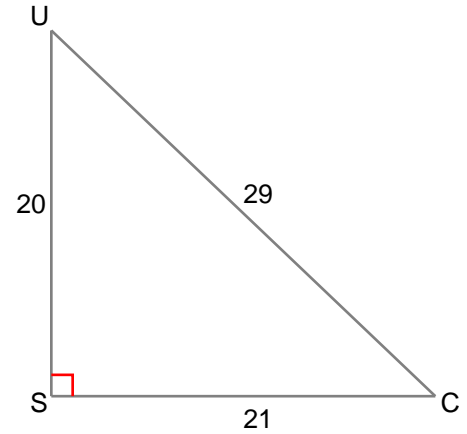
Trigonometric Ratios

Find the given trigonometric ratio. The answer will be in fraction form.

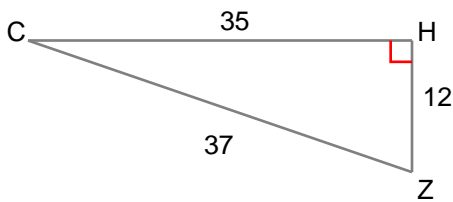
1) $\cos Z =$ _____



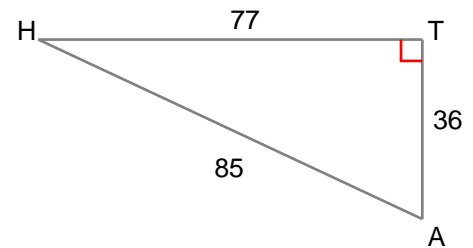
2) $\sin U =$ _____



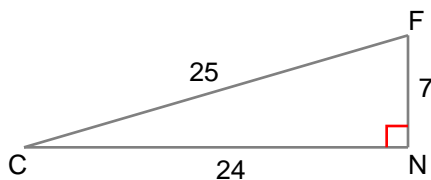
3) $\sin Z =$ _____



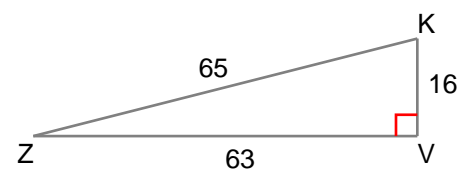
4) $\tan H =$ _____



5) $\tan C =$ _____



6) $\cos Z =$ _____



Name : _____

Score : _____

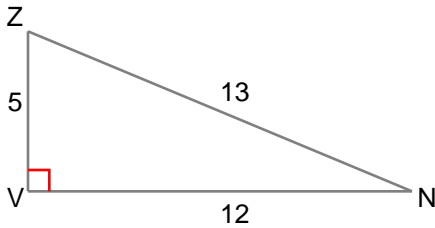
Teacher : _____

Date : _____

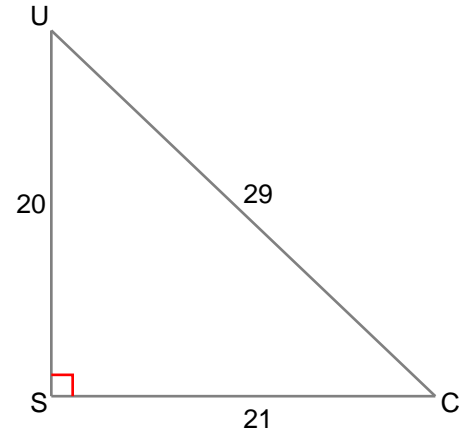
Trigonometric Ratios

Find the given trigonometric ratio. The answer will be in fraction form.

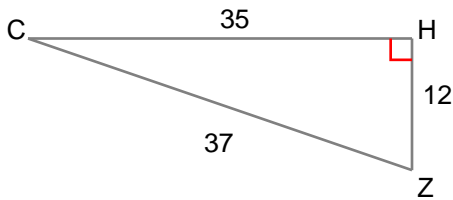
1) $\cos Z = \frac{5}{13}$



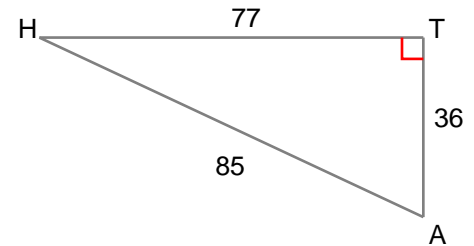
2) $\sin U = \frac{21}{29}$



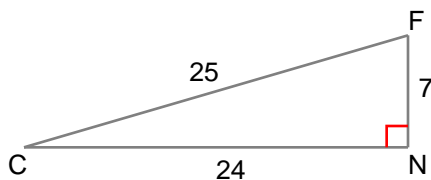
3) $\sin Z = \frac{35}{37}$



4) $\tan H = \frac{36}{77}$



5) $\tan C = \frac{7}{24}$



6) $\cos Z = \frac{63}{65}$

